

## NOTATION EXERCISE 1

### Question 1 (5 marks)






Write the following notes on the staff provided:

- a A in a space as a semibreve
- b Middle C as a minim
- c F on a line as a dotted crotchet
- d D below the staff as a quaver
- e B on a line as a dotted minim



### Question 2 (2½ marks)

Match the words with the correct rhythmic patterns. Write your answers as 1(b) etc. in the space provided.

- |                         |   |   |  |
|-------------------------|---|---|--|
| 1 Oranges and lemons    | a | C |   |
| 2 Peach, pear, plum     | b | C |  |
| 3 Pawpaw, mango         | c | C |  |
| 4 Apples and kiwi-fruit | d | C |  |
| 5 Grapes, watermelons   | e | C |  |

Answers: \_\_\_\_\_

### Question 3 (5 marks)

Write the time names underneath this rhythmic pattern.



## Question 4 (2½ marks)

Write notes one octave below the given notes.



## Question 5 (5 marks)

There are 10 mistakes in the music below. Rewrite it correctly on the staff provided.

